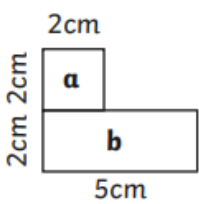
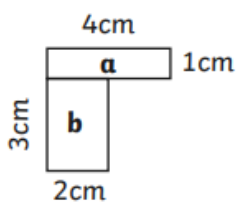
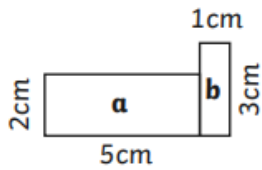
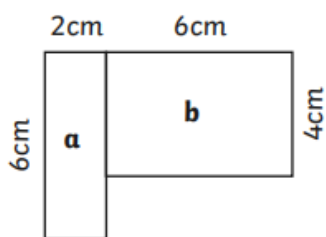
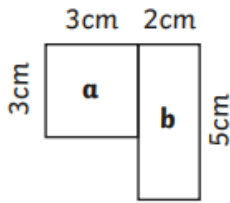
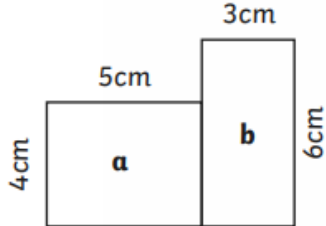


Area

Calculate the area of each rectangle, then calculate the area of the whole compound shape.

<p>1.</p>  <p>Area a: _____ cm² Area b: _____ cm² Total: _____ cm²</p>	<p>2.</p>  <p>Area a: _____ cm² Area b: _____ cm² Total: _____ cm²</p>
---	--

<p>3.</p>  <p>Area a: _____ cm² Area b: _____ cm² Total: _____ cm²</p>	<p>4.</p>  <p>Area a: _____ cm² Area b: _____ cm² Total: _____ cm²</p>
--	---

<p>5.</p>  <p>Area a: _____ cm² Area b: _____ cm² Total: _____ cm²</p>	<p>6.</p>  <p>Area a: _____ cm² Area b: _____ cm² Total: _____ cm²</p>
---	--