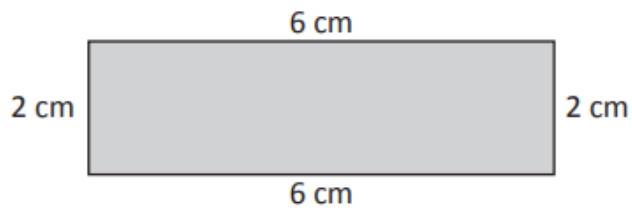



LO: I can find the perimeter of a rectilinear shape

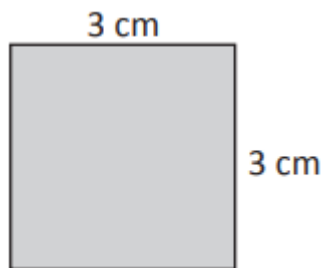
Find the perimeter of these shapes:



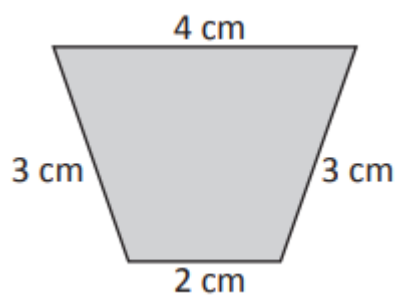
$$\square + \square + \square + \square = \square \text{ cm.}$$



$$\square + \square + \square + \square = \square \text{ cm.}$$



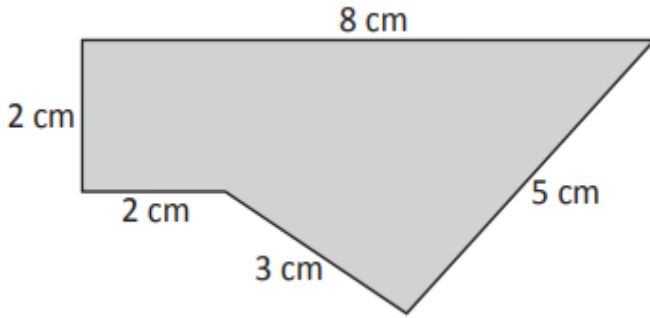
$$= \underline{\hspace{2cm}} \text{ cm}$$



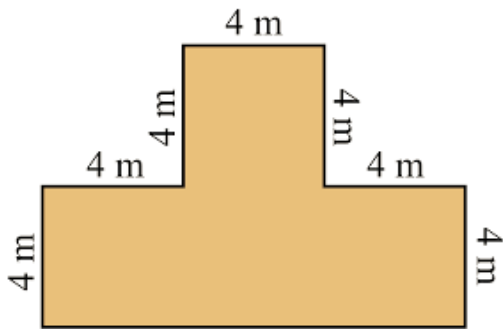
$$= \underline{\hspace{2cm}} \text{ cm}$$

Challenge:

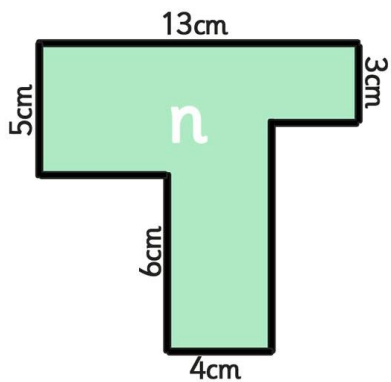
Find the perimeter of these shapes. Show your working clearly.



= _____ cm.



= _____ m.



= _____ cm