




Adding numbers together

Adding two numbers together: Maths

Write the answers in the circles.

 $+$  $=$ 

 $+$  $=$ 

 $+$  $=$ 

 $+$  $=$ 

 $+$  $=$ 