

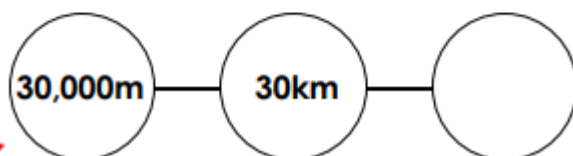
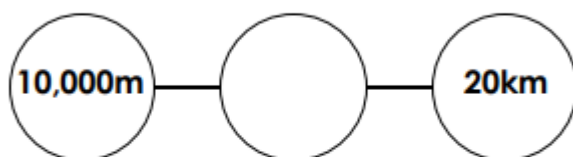
Maths (2) Converting between Kg and g or Km and m – reasoning and problem-solving.

1a. Complete so that each line adds up to 8kg.
Give your answers in grams.



PS

1b. Complete so that each line adds up to 70km.
Give your answers in metres.



PS

2a. Using the cards below, create 3 different comparison statements.



PS

2b. Using the cards below, create 3 different comparison statements.



PS

3a. A pack of strawberries weighs 500g.

2 packs of strawberries will cost £4.00



Is Beth correct?
Explain how you know.



R

3b. A bunch of banana weighs 500g.

4 bunches of bananas will cost £5.00



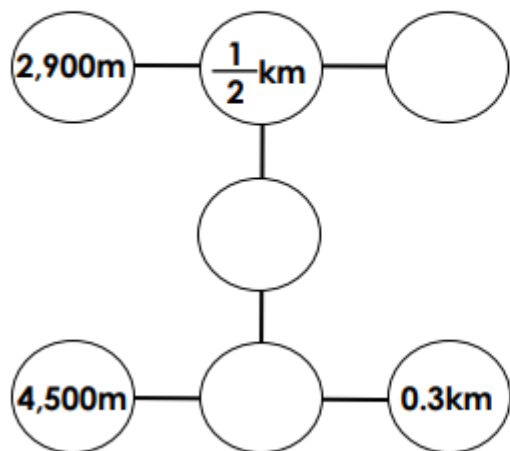
Is Jack correct?
Explain how you know.



R

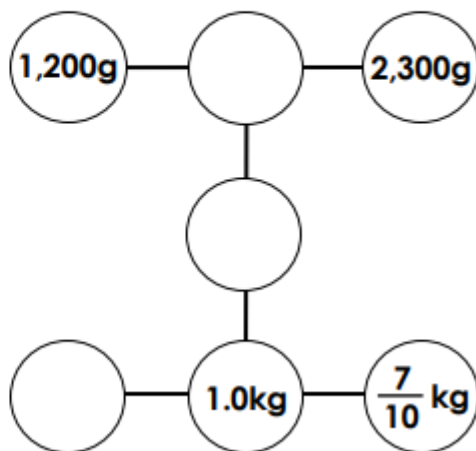
Maths (2) Converting between Kg and g or Km and m – reasoning and problem-solving.

4a. Complete the circles so that each line adds up to 5,000m in every direction. Give your answer in kilometres.



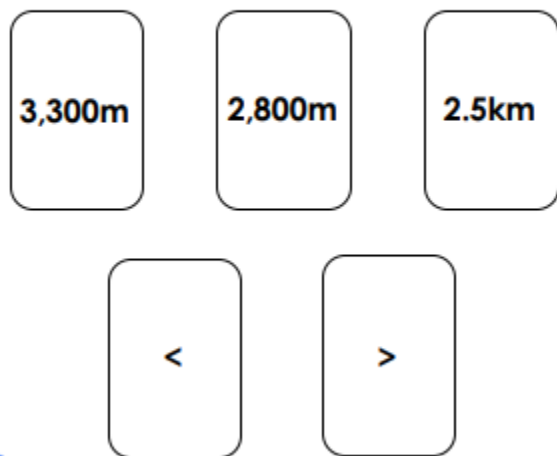
PS

4b. Complete the circles so that each line adds up to 4,000g in every direction. Give your answer in kilograms.



PS

5a. Using the cards below, create 3 different comparison statements.



PS

5b. Using the cards below, create 3 different comparison statements.



PS

6a. A bag of oranges weighs 1,500g.

A bag of oranges would cost £3.90.



£2.60
per kg

Is Nadia correct?
Explain how you know.



R

6b. A box of blueberries weighs 500g.

3 boxes of blueberries would cost £3.20



£2.80
per kg

Is Ewan correct?
Explain how you know.



R