

Maths - Week Commencing 20/4/20

Activity 4

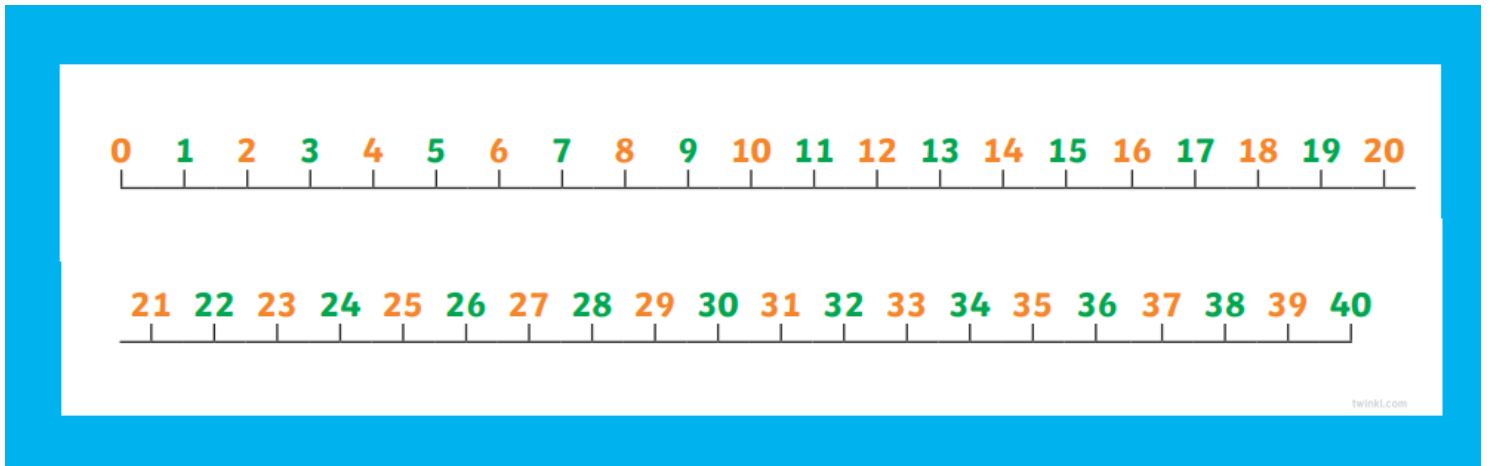
LO: To identify one more or one less than a given number.

Recap

My number has 3 tens and 8 ones. What is my number? _____

My number is 25. How many tens and ones does it have? _____


For this activity, we will be finding one more and one less. Using a number line can help with this.



To find one more than a given number, you jump one place on the number line to the right.

To find one less than a number, you jump one place on the number line to the left.

1.

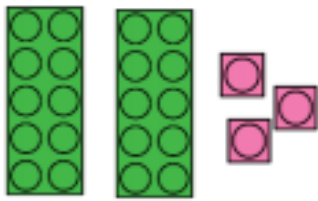


There are _____ donuts.

One more than _____ is _____

One less than _____ is _____

2.



There are _____ bumps on the Lego.

One more than _____ is _____

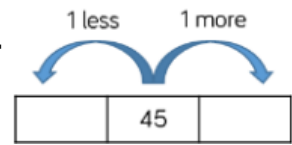
One less than _____ is _____

3.




One more than _____ is _____

One less than _____ is _____

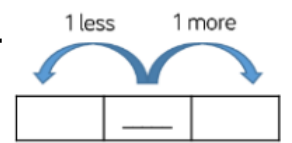


4.

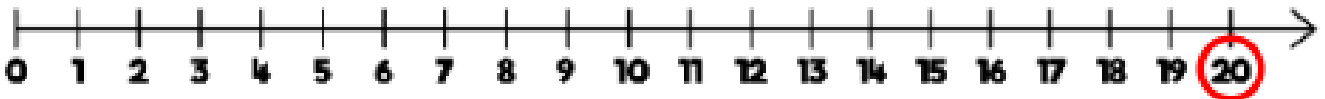


One more than _____ is _____

One less than _____ is _____

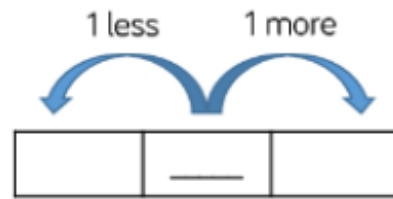


5.



One more than _____ is _____

One less than _____ is _____



Challenge

Always, sometimes, never...



When you find one more than a number, only the ones digit will change.

Convince me using some examples.

What is my number and why?

Use the clues to work out the number.

- I have a number with 3 tens.
- One less than my number makes the tens digit change.
- One more than my number has 1 one.