



Maths

Year 3

Week commencing

22.06.20


This week's overview:

Please ONLY complete work on the days specified below					
	Monday	Tuesday	Wednesday	Thursday	Friday
Group A English	LIVE LESSON: Silly Billy and follow up CGP English. Activity Pack Spellings Bug Club/Reading 30min	Complete Day 2's work. CGP Pages 32 and 33. Reading comprehension on Mayan Writing Spellings Bug Club/Reading 30min	Complete Day 3's work. CGP Pages 2 and 3. Nouns and Adjective focus looking at writing out own Scene Description of the Mayan Rainforest. Spellings Bug Club/Reading 30min	Complete Day 4's work. CPG Pages 4 and 5. Adverbs focus, looking at continuing a story, including as many high level Adverbs as possible. Spellings Bug Club/Reading 30min	Catch up day for last week's work. <u>Don't</u> forget Bug Club!
Group A Maths	Maths Lesson 1: Right Angles in shapes. Follow the links for White Rose website and complete activity questions.	Maths Lesson 2: Comparing Angles. Follow the links for White Rose website and complete activity questions.	LIVE LESSON: *CGP Pages 34 and 35 to <u>be completed</u> within the lesson.	Times tables. Complete pages 2,3,4 and 5 in your CGP Times Table Book. Then following the link to the Daily 10 Challenge.	Catch up day for last week's work. Please remember to practice your 3, 4 and 8 times tables.
Group B English	Catch up day for last week's work. <u>Don't</u> forget Bug Club!	LIVE LESSON: Silly Billy and follow up CGP English. Activity Pack Spellings Bug Club/Reading 30min	Complete Day 2's work. CGP Pages 32 and 33. Reading comprehension on Mayan Writing Bug Club/Reading 30min	Complete Day 3's work. CGP Pages 2 and 3. Nouns and Adjective focus looking at writing out own Scene Description of the Mayan Rainforest. Spellings Bug Club/Reading 30min	Complete Day 4's work. CPG Pages 4 and 5. Adverbs focus, looking at continuing a story, including as many high level Adverbs as possible. Spellings Bug Club/Reading 30min
Group B Maths	Catch up day for last week's work. Please remember to practice your 3, 4 and 8 times tables.	Maths Lesson 1: Right Angles in shapes. Follow the links for White Rose website and complete activity questions.	Maths Lesson 2: Comparing Angles. Follow the links for White Rose website and complete activity questions.	LIVE LESSON: *CGP Pages 34 and 35 to <u>be completed</u> within the lesson.	Times tables. Complete pages 2,3,4 and 5 in your CGP Times Table Book. Then following the link to the Daily 10 Challenge.



Week 11 Year 3 Maths

Angles



DAY

1

Lesson 1- Right Angles in Shapes

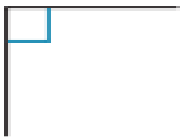





- ▶ Here is the link to todays video.
- ▶ <https://whiterosemaths.com/homelearning/year-3/>
- ▶ Then click on.

Summer Term Week 9 (w/c 22.06.20)

For today's video. Then complete the question son the next few slides.


Right angles in shapes

1 There is at least one right angle in each picture. Mark the right angles on the pictures. The first one has been done for you.

a) 	d) 
b) 	e) 
c) 	f) 

Compare answers with a partner.

2 A rectangle has four right angles. Mark the right angles on the rectangle.



3 Alex and Jack are identifying right angles.



Both of the angles are right angles.



I disagree. The first one is a right angle but the second one is a left angle because it is on the left of the line.

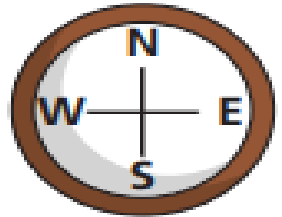
Who do you agree with? _____

Talk about it with a partner.

4 Dexter is facing north. He turns a quarter turn.



This is the same as one right angle.



Do you agree with Dexter? _____

Talk about it with a partner.

5 Complete the sentences.


A quarter turn is equal to right angle.

A half turn is equal to right angles.

A three-quarter turn is equal to right angles.

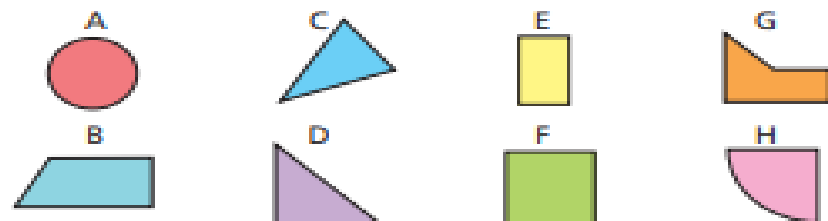
A full turn is equal to right angles.

6 Draw the right angles on each shape.



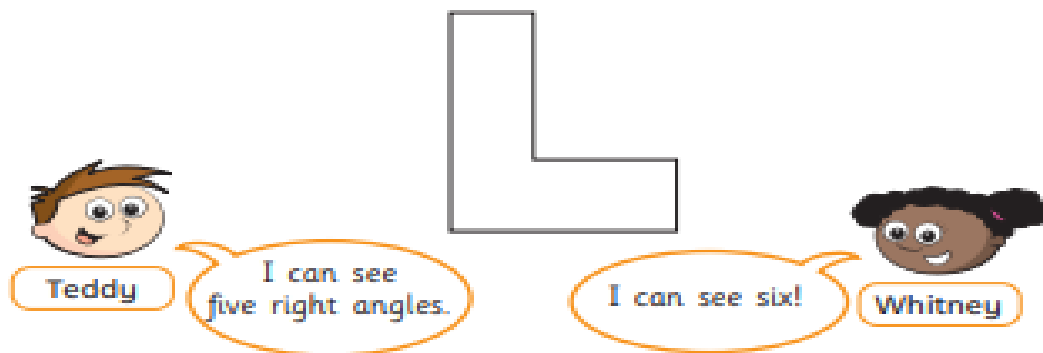
7 Look at the number of right angles in each shape.

Sort the shapes into the table.



0 right angles	1 right angle	2 right angles	3 right angles	4 right angles

8 Teddy and Whitney are identifying right angles.

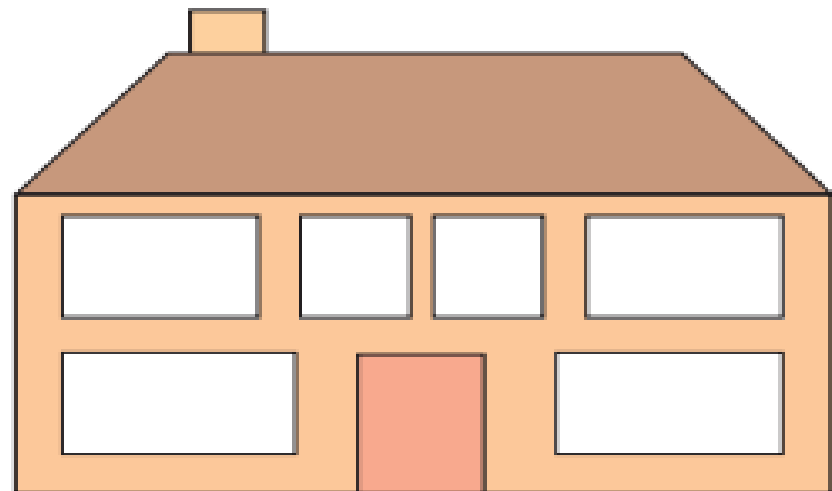


Who do you agree with? _____

Draw on the shape to show your thinking.

9 How many right angles can you find in the picture?

Mark them on the picture.



Create your own problem like this for a partner.



DAY 2

Lesson 2- Compare Angles

- ▶ Here is the link to today's video.
- ▶ <https://whiterosemaths.com/homelearning/year-3/>
- ▶ Then click on.

Summer Term Week 9 (w/c 22.06.20)

For today's video. Then complete the question on the next few slides.

1 Here are some angles.

a) Circle the angle that is greater than a right angle.



b) Circle the angle that is less than 90 degrees.



2 Draw three different angles that are less than a right angle.



Compare answers with a partner.

Complete the sentence.

These are all examples of _____ angles.

3 Draw two different obtuse angles.

Compare answers with a partner.

Complete the sentence.

Obtuse angles are greater than degrees

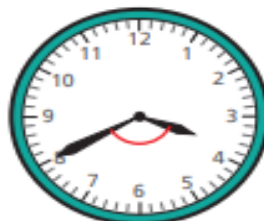
but less than degrees.

4 Is the angle between the hands of the clock acute or obtuse?

a)

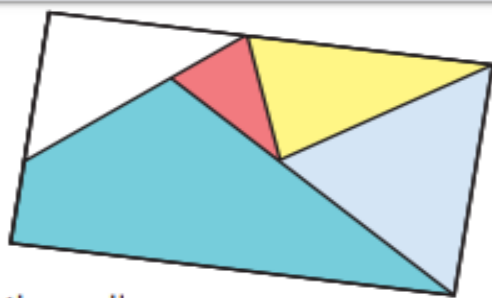


b)

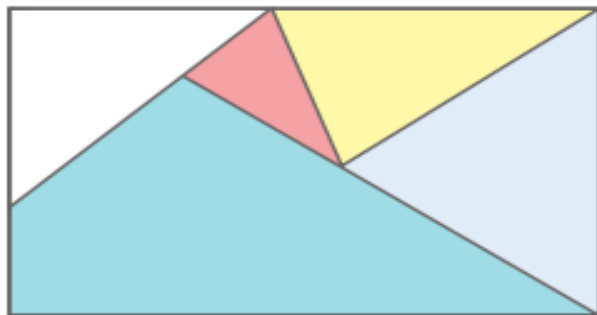




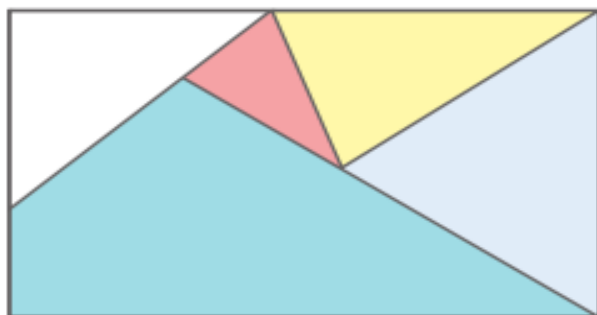
5 Here is a piece of wallpaper.



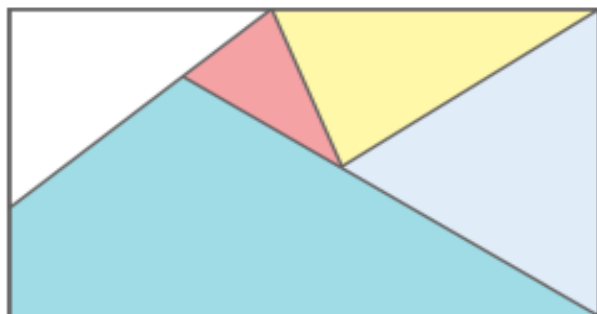
a) Mark two right angles on the wallpaper.



b) Mark four acute angles on the wallpaper.



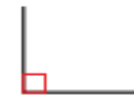
c) Mark two obtuse angles on the wallpaper.



6 Write $<$, $>$ or $=$ to compare the sizes of the angles.



a)




b)



c)



7 Draw a shape that has one right angle, two acute angles and one obtuse angle.



Compare answers with a partner.

What is the same and what is different about your shapes?



DAY 3

Lesson 3- Live Lesson with Mr Black

- ▶ This week you will have one Live Lesson with Mr Black.
- ▶ For this lesson you will need your Maths Activity Book and a Pencil.





WELCOME TO YOUR FIRST MATHS LIVE LESSON!



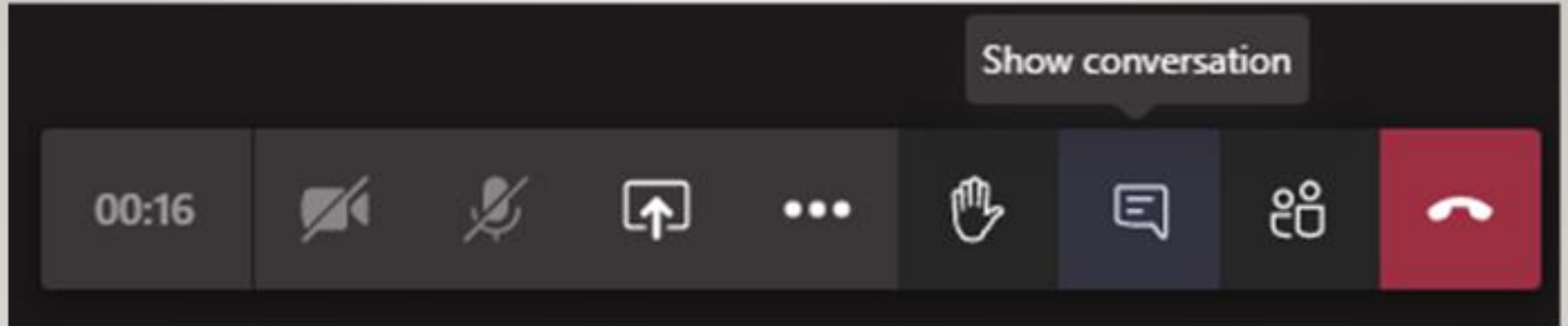
Please make sure you mute the microphone when told to do so and have your pen/pencil, ruler, rubber and paper ready!

LETS RECAP THE RULES.....

- Rules and expectations during our live lesson sessions
- Expectations throughout the week
- Story time and discussion



Using the comments box



A graphic featuring a grid of squares in various shades of blue, purple, and red. The number '4' is prominently displayed in white, with the word 'DAY' written below it in a smaller white font. The background has a color gradient from light blue at the top to dark red at the bottom.

4
DAY

Lesson 4- 3 and 4 Times Tables.

- ▶ In your Times Tables Activity book complete pages 2,3,4 and 5.
- ▶ You can also practice your times tables using this link. Click below.

